

ADI SOYADI:

3.SINIF

MATEMATİK KONU ANLATIM ÇALIŞMASI


BASAMAK ADI - BASAMAK DEĞERİ - ÇÖZÜMLEME



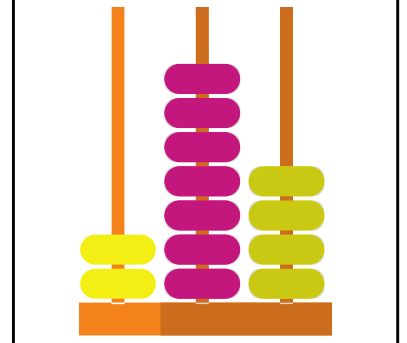
Aşağıda abaküslerle gösterilen sayıların basamak değerlerini ve sayıların okunuşlarını örnekteki gibi yazalım.




Sayı: .....  
...yüzlük+... onluk+..birlik




Sayı: .....  
...yüzlük+... onluk+..birlik




Sayı: .....  
...yüzlük+... onluk+..birlik




Sayı: .....  
...yüzlük+... onluk+..birlik




Sayı: .....  
...yüzlük+... onluk+..birlik




Sayı: .....  
...yüzlük+... onluk+..birlik



Sayı: .....  
...yüzlük+... onluk+..birlik



Sayı: .....  
...yüzlük+... onluk+..birlik



Sayı: .....  
...yüzlük+... onluk+..birlik

ADI SOYADI:

3.SINIF

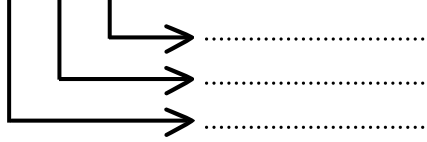
MATEMATİK KONU ANLATIM ÇALIŞMASI

BASAMAK ADI - BASAMAK DEĞERİ - ÇÖZÜMLEME

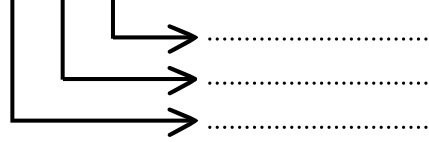


Aşağıda verilen doğal sayıların rakamlarının basamak değerlerini yazalım.

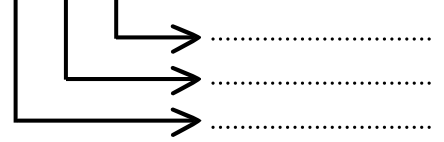
1 0 5



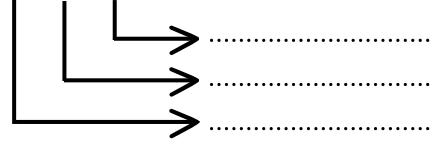
7 0 1



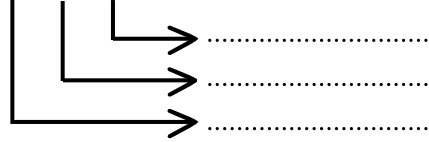
1 8 6



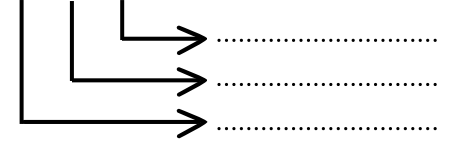
9 5 4



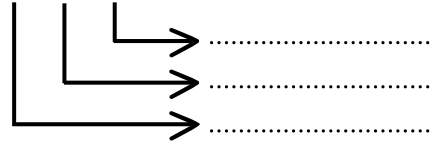
1 7 2



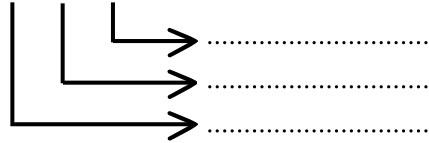
6 4 8



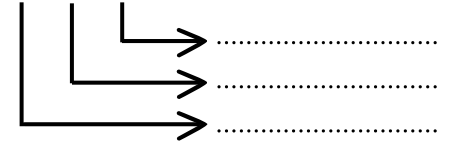
4 4 4



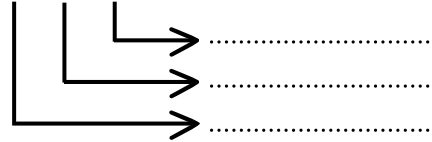
7 5 0



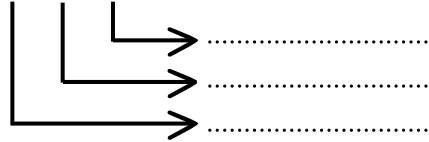
4 5 2



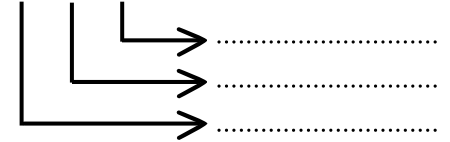
4 3 0



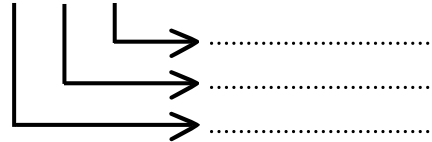
7 5 1



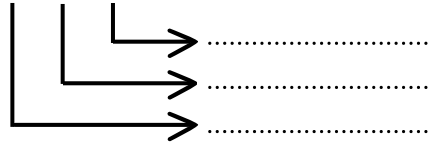
4 0 8



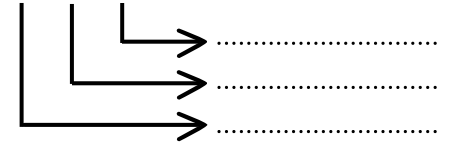
2 0 0



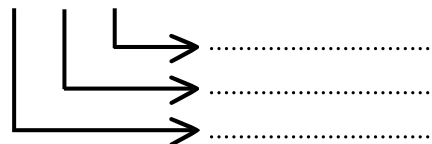
3 4 9



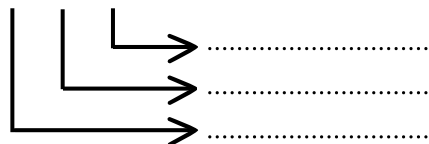
9 5 7



1 4 2



7 5 0



4 0 9

